
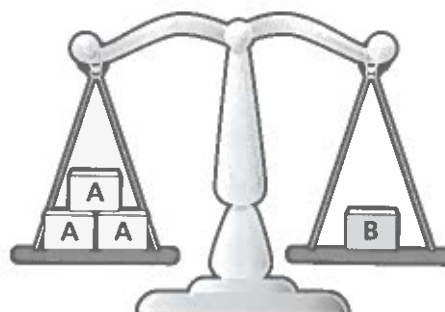


CHALLENGE

# End of unit check

## My journal

Milo balances these .



Work out the mass of each .

- First I \_\_\_\_\_.
- Then I \_\_\_\_\_.
- Next I \_\_\_\_\_.
- \_\_\_\_\_.

A =  kg

B =  kg

C =  kg

These words  
might help you.

mass

kilogram

divide


compared

multiply



## Power check

How do you feel about your work in this unit?



## Power puzzle

Weigh an empty  .

Measure 100 ml of water into the jug and weigh again.

Repeat for 200 ml and 300 ml.

Write your results in the table.

Volume of water	0 ml	100 ml	200 ml	300 ml
Mass in grams				

I notice that