

Telling time to the hour

1 Match the times to the clocks.

12 o'clock



8 o'clock




1 o'clock



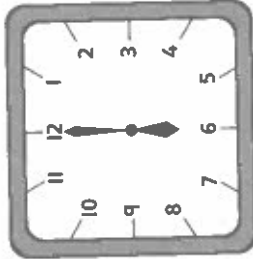
2 What time is it?

a)



o'clock

b)



o'clock

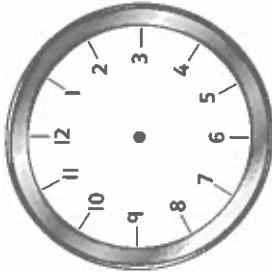
c)



o'clock


3 Draw the times.

a)



10 o'clock

b)



2 o'clock

c)



7 o'clock

4 Who is right? Circle your answer.



The minute hand is pointing to the 12, so it is 12 o'clock.




12 o'clock

That is not right. The hour hand is pointing to the 5, so it is 5 o'clock.



5 o'clock



5

The minute hand is pointing to the 12. The hour hand is pointing to a number with a 1 in it.



CHALLENGE

What times could it be?

I wonder how many answers I can think of.



What do you do at these different times of day?

Reflect

A clock shows 4 o'clock.

Draw what it looks like.

